

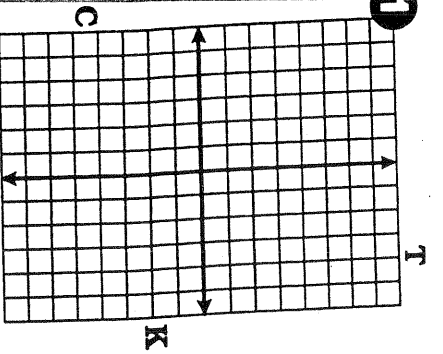
# How Does Toggle Toxx Feel Today?

Complete the table of solutions for each equation. Graph the solutions and draw a line through them. If extended, the line will cross a letter. Write this letter in each box containing the exercise number.

6 2 1 8 8 2 4 8 3 7 5 4

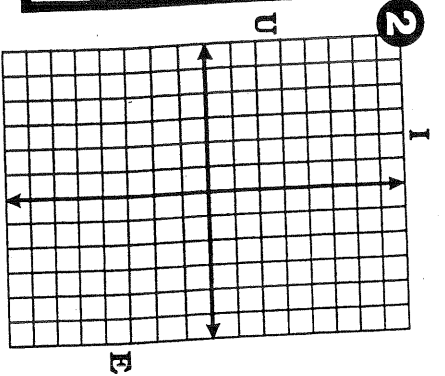
**1**  $y = 3x - 2$

x	y
3	
2	
-2	
0	



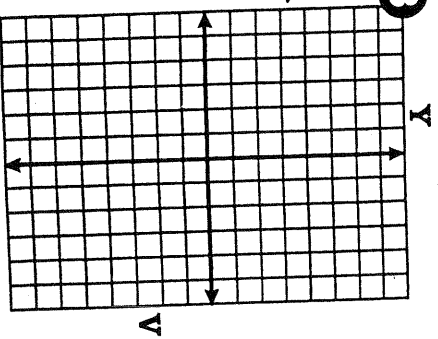
**2**  $y = -2x + 5$

x	y
5	
-1	
2	
0	



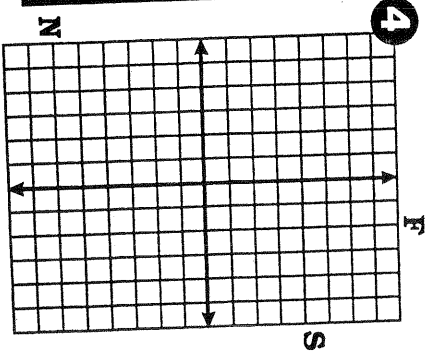
**3**  $y = -x - 3$

x	y
4	
-1	
-6	
0	



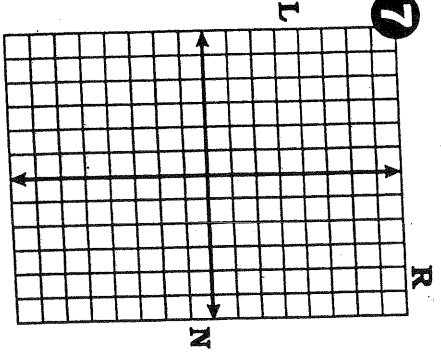
**4**  $y = \frac{1}{2}x + 1$

x	y
4	
-6	
-2	
0	



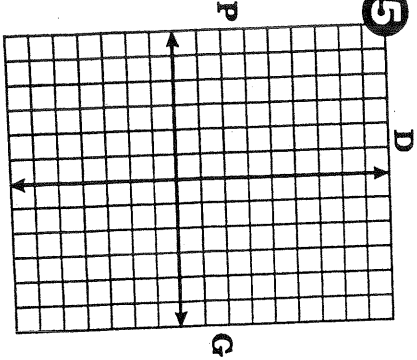
**6**  $x + y = 6$

x	y
1	
4	
-2	
0	



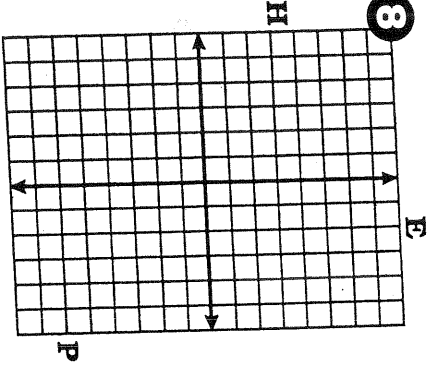
**5**  $y = 7 - 2x$

x	y
2	
-1	
5	
0	



**8**  $x + 2y = 0$

x	y
6	
-2	
-6	
0	



**6**  $y = -\frac{2}{3}x + 4$

x	y
3	
-3	
6	
0	

