

Name _____

Area & Perimeter of Rectangles & Parallelograms


Period _____

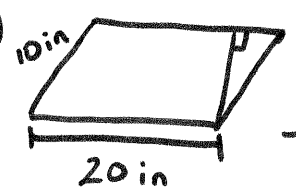
Area is:


Perimeter is:

① $L = 34$ in Area _____
 $W = 25$ in Perimeter _____

② $L = 10$ feet $A =$ _____
 $W = 7$ feet $P =$ _____

③  $A =$ _____
 $P =$ _____
 $L =$ _____
 $W =$ _____

④  $L =$ _____
 $W =$ _____
Area = _____
Perimeter = _____

⑤  $L =$ _____
 $W =$ _____
Area _____
Perimeter _____

⑥ $L = 4$ in $A =$ _____
 $W = 2$ in $P =$ _____